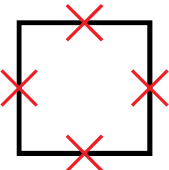
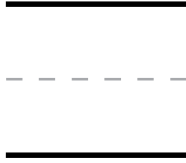



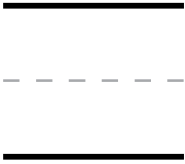
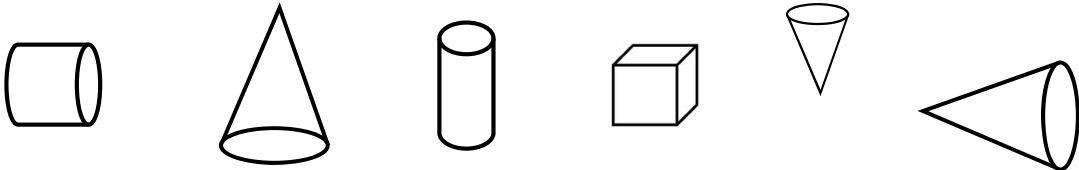

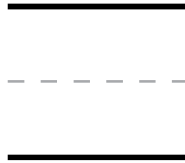
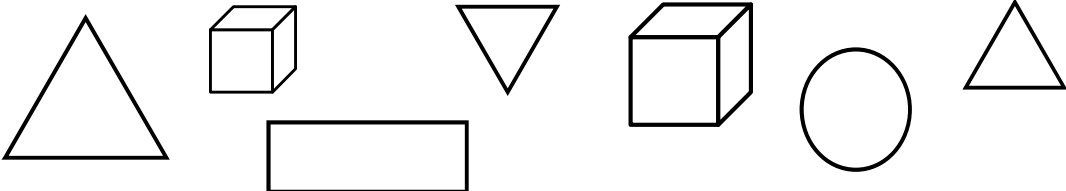


Sample Lesson #2

1.			K.G.4
2.			K.MD.2
3.			K.CC.5
4.		K.G.2	
5.			K.OA.1
6.		K.G.2	

Directions:

1. A **square** has **sides**. The **sides** on the square have an X. How many sides does a square have? Write the number on the line.
2. Circle the object that is **heavier**.
3. Count the sharks. How many are there? Write the number.
4. Color the cones.
5. Trace each sign in the number sentence. Write the sum on the line.
6. Color the triangles.