





Name \_\_\_\_\_

## Counting On


Help the frogs leap to the right answer.  
When adding two numbers, start with the bigger number and count on.




$$3 + 2 = \underline{\quad}$$



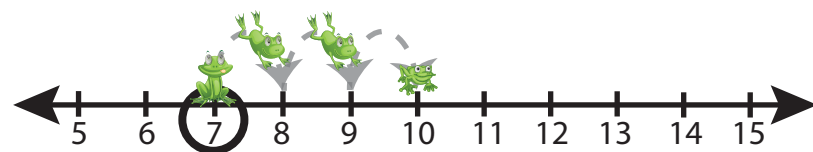
$$5 + 4 = \underline{\quad}$$




$$4 + 1 = \underline{\quad}$$



$$9 + 1 = \underline{\quad}$$



$$7 + 3 = \underline{\quad}$$




$$4 + 3 = \underline{\quad}$$




Name \_\_\_\_\_

## Counting On


Help the frogs leap to the right answer.  
When adding two numbers, start with the bigger number and count on.




$$3 + 2 = \underline{5}$$



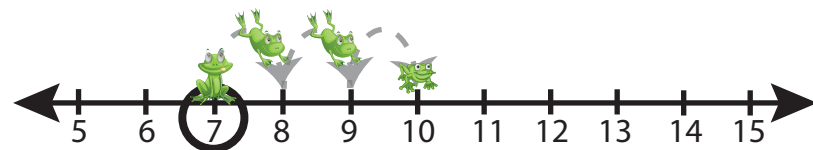
$$5 + 4 = \underline{9}$$




$$4 + 1 = \underline{5}$$



$$9 + 1 = \underline{10}$$



$$7 + 3 = \underline{10}$$



$$4 + 3 = \underline{7}$$