

Thankful for Math




1. $364,816 + 552,575 = ?$
2. Which lines are perpendicular?
3. $65,816 \bigcirc 65,618$
4. Which shows $\angle B$?

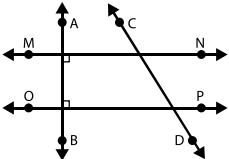
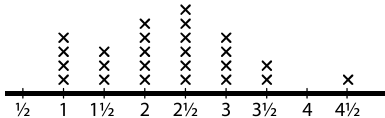
A)

B)

C)

D)
5. $918 - 469 = ?$
6. Angie and Sterling were in different lines at the grocery store. Angie waited in line for 12 minutes, and Sterling waited for 9 minutes. How many seconds longer did Angie wait than Sterling?
7. The pie baked in the hot oven for 900 seconds. How many minutes did the pie bake?
8. List the first 6 multiples of 4.
9. $3,064 \div 8 = ?$
10. For the equation in the box, which of the following is the best estimate for x : 300, 500, or 700?
11. When lined up end to end, what is the total length of the four shortest leaves in the sample?
12. Write 21,407 in expanded form.
13. Round 356,492 to the nearest thousand.
14. Use the distributive property to multiply 28×56 . Multiply the two addends of 28 ($20 + 8$) by the two addends of 56 ($50 + 6$). Show the product.
15. Decompose (break down into smaller parts) the mixed number $\frac{25}{12}$. Here is one way to show the work: $\frac{25}{12} = 1 + 1 + \frac{1}{12}$. Rename it in another way.



1. 4.NBT.4	2. 4.G.2 	3. 4.NBT.2
4. 4.G.1	5. 4.NBT.4	6. 4.MD.2
7. 4.MD.1	8. 4.OA.4	9. 4.NBT.6
10. 4.OA.3 $235 + 265 + 104 + 98 = x$	11. 4.MD.4 Sample Set of Leaves (Lengths in inches) 	12. 4.NBT.2
13. 4.NBT.3	14. 4.NBT.5	15. 4.NF.3