

Thankful for Math

1. One batch of green beans can make 9 casseroles. How many casseroles will 6 batches of green beans make?



2. $6 \times 8 = ?$

3. $635 + 292 = ?$

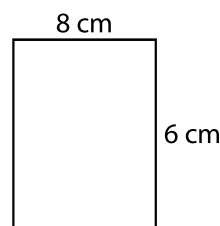
4. $913 - 706 = ?$



5. Trina must spend at least 25 minutes reading each evening. If she starts reading at 8:25 p.m., what is the earliest time she can finish?

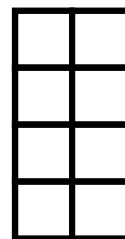
6. A(n) _____ has 5 sides.

7. Find the area. Multiply the side lengths.




8. $35 \div 5 = ?$

9. The Ferris wheel had 9 empty seats. Each seat could hold 2 riders. How many more riders could fit on the Ferris wheel? Draw a picture to help you.

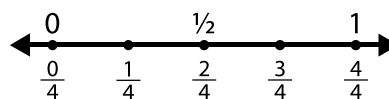


10. Find the area by counting the square units.

11. $12 \div 3 = ?$ (What number makes 12 when multiplied by 3?)




12. Look at the number line diagram. Which fraction is equal to 1? It will be at the same point on the number line.



13. Write three hundred sixty-two as a base-ten number.

14. The picture shows 10 turkeys or 2 groups of _____ turkeys.



15. Draw along the dotted lines to divide the rectangle. Shade in one part. What fraction is shaded?

1. 3.OA.3	2. 3.OA.7	3. 3.NBT.2
4. 3.NBT.2	5. 3.MD.1	6. 2.G.1
7. 3.MD.7	8. 3.OA.7	9. 3.OA.3
10. 3.MD.6	11. 3.OA.6	12. 3.NF.3
13. 2.NBT.3	14. 3.OA.2	15. 3.G.2 