




Sample Lesson #3

1. Look at the pictures in the chart below. Decide whether the picture shows a **cirrus**, a **cumulus**, or a **stratus** cloud. Put a ✓ in the correct column.

	Cirrus	Cumulus	Stratus
			
			
			

2. Which **three** of these are needed for a plant to make food?

water soil air sunlight

3. What can happen when rivers and lakes get too full?

flood drought tornado

4 – 5. Animals have four basic needs. List them.



6. What the air outside is like is called _____.

seasons wind weather

7. Which animal group makes milk for its babies?

reptile bird fish mammal

8. Which tool is shown?

- A) thermometer
- B) weather vane
- C) scale

