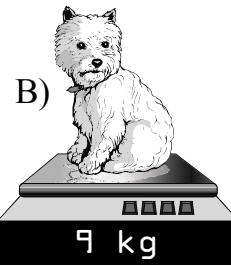
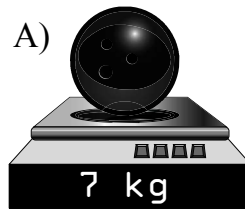


Sample Lesson #1

1. $713 + 157 = ?$



2. Which weighs more?

3. $2 + 2$ means the same as $\underline{\quad} \times \underline{\quad}$. $\underline{\quad}$ groups of two equal $\underline{\quad}$. Draw a picture to help you.

4. Monica began her piano lesson at 3:45 p.m. If her lesson lasts 30 minutes, at what time will her lesson be over?



5. $5 \times 7 = ?$ (Hint: Think 5 groups of 7.)

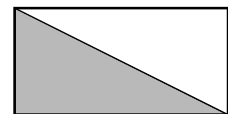

6. The answer to an addition problem is the $\underline{\hspace{2cm}}$.

7. $66 - 48 = ?$

8. $17 + 14 + 12 = ?$


9. Add $6 + 7$. One is an even number and one is an odd number. Is their sum even or odd?10. Any number multiplied by zero is $\underline{\hspace{2cm}}$.

11. $2 \times 4 = ?$

12. Which shape shows $\frac{1}{2}$ shaded?
Draw it.13. Write $800 + 90 + 3$ as a base-ten number.

14. $632 + 275 = ?$

15. This clock shows what time?



| | | |
|-------------|--------------------|------------|
| 1. 3.NBT.2 | 2. 3.MD.2 | 3. 3.OA.1 |
| 4. 3.MD.1 | 5. 3.OA.7 | 6. 1.OA.1 |
| 7. 3.NBT.2 | 8. 2.NBT.6/3.NBT.2 | 9. 3.OA.9 |
| 10. 3.OA.7 | 11. 3.OA.7 | 12. 3.G.2 |
| 13. 2.NBT.3 | 14. 3.NBT.2 | 15. 3.MD.1 |