



# Sample Lesson #3

- Write the number using base-ten numerals. 45 tens
- Fill in the sign to make this sentence true.  $312 \bigcirc 231$
- $566 - 243 = ?$
- There were 165 marbles in the jar. Jason gave 88 of those marbles to his friend Ryan. How many marbles are left in the jar?




- $721 + 238 = ?$
- Count the objects in the array. Write an addition sentence to show the sum.  
 \_\_\_\_\_ + \_\_\_\_\_ = \_\_\_\_\_



- I have five hundreds, four tens, and six ones. What number am I?
- It is 3:15 now. Draw hands on the clock showing this time.
- The following measurements were collected by a second grade classroom. Use the data to create a line plot.

**Crayon Lengths**

Color	Length (cm)
Sky blue	10
Orange	5
Blue-green	8
Red	7
Yellow	6
Pink	8
Purple	6
Brown	8



- A yardstick is 36 inches long. Renee put two yardsticks end to end. How long were the two yardsticks together?
- $33 + 19 + 11 + 21 = ?$

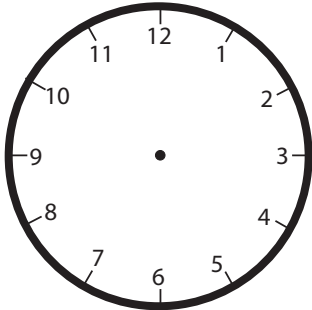
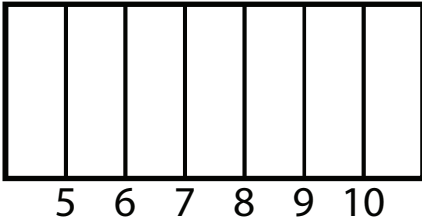
- What is the name of the shape?  
 cube                      cone                      cylinder



- $35 + \underline{\hspace{2cm}} = 80$
- Todd has his morning snack at 10:00 a.m. or 10:00 p.m.?
- How long does Arts & Crafts last?

If you went to all of the park's activities, how long would you be at the park?

Park Schedule	
Time	Activity
1:30 – 2:00	Story Time
2:00 – 3:30	Arts & Crafts
3:30 – 4:30	Baseball

<p>1. 2.NBT.3</p>	<p>2. 2.NBT.4</p>	<p>3. 2.NBT.7</p>
<p>4. 2.OA.1</p>	<p>5. 2.NBT.7</p>	<p>6. 2.OA.4</p>
<p>7. 2.NBT.3</p>	<p>8. 2.MD.7</p> 	<p>9. 2.MD.9</p> <p>Crayon Lengths</p> 
<p>10. 2.MD.5</p>	<p>11. 2.NBT.6</p>	<p>12. 1.G.2</p>
<p>13. 2.OA.1</p>	<p>14. 2.MD.7</p>	<p>15. 2.MD.10</p>