


Sample Lesson #2

1.

Does the clock show 2 o'clock?



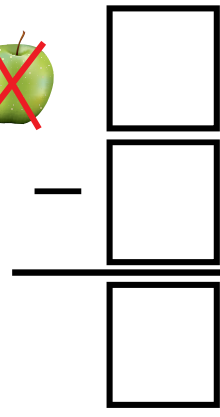
yes no

1.MD.3

There are 6 apples. Three apples are eaten. How many apples are left? Write a subtraction problem.



2 – 3.

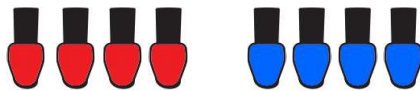


apples

1.OA.1

Katie has 4 bottles of red nail polish and 4 bottles of blue nail polish. How many bottles does she have in all? Finish the addition sentence.

4.

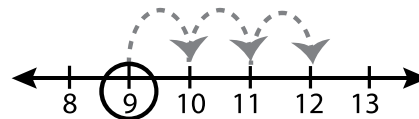


___ + ___ = ___ bottles

K.OA.2

5.

Start at 9. Count on 3.
Write the sum.



9 + 3 = ___

1.OA.5

Color the cylinders.

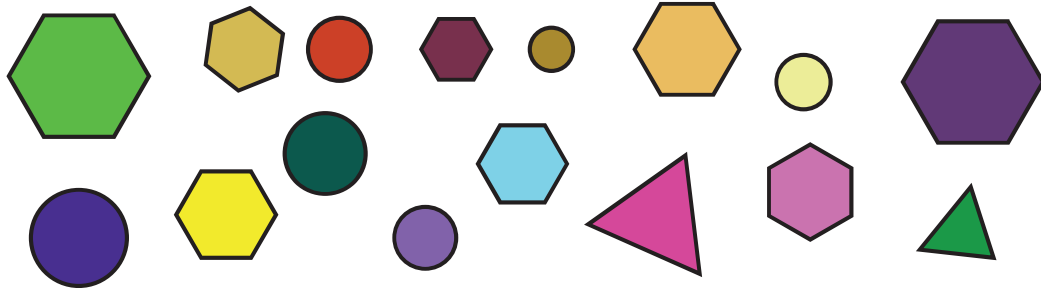
6.



K.G.2

Sort the objects by shape. How many are triangles? How many are circles? How many are rectangles? Circle the shape for the group that has the most.

7 – 8.




K.MD.3

___ \triangle triangles ___ \circ circles ___ \hexagon hexagons

Draw the missing circles to make ten. Write the number of circles you drew in the box to complete the question.

9 – 10.



K.OA.4

$$10 = 1 + \square$$

Circle the number fourteen.

11.

14 4 9 12

1.NBT.1

Dan brought 15 doughnuts to school for his birthday. He gave 14 doughnuts to his friends. How many doughnuts are left? Write a subtraction sentence.

12.



1.OA.1

___ \circ ___ = ___ doughnuts