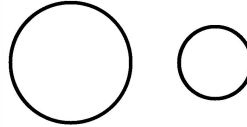


### Sample Lesson #3

1. Are these shapes congruent?

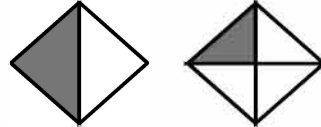


2. Round 72 to the nearest ten.

3. How much money is shown?




4.  $640 - 322 = ?$



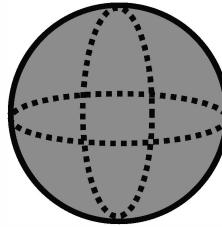
5. Which fraction is greater?

6.  $10 \times 2 = ?$



7. Four children plant tulips. If each child plants 5 tulips, how many tulips do they plant in all? Make a picture to help you.


8. How many inches are in a foot?



9. Write the name of this shape.

10.  $3 + 3 + 3 + 3 + 3$  is the same as  $5 \times 3$ . Both are equal to \_\_\_\_\_.

11. There are \_\_\_ quarts in a gallon.

12.  $14 \div 2 = ?$  

13. In the number 851 which digit is in the hundreds place?

14. Write 93 using words.

15. How many days are in the month of January?

On which day of the week is January 25th?

#### January

S	M	T	W	T	F	S
				1	2	3
4	5	6	7	8	9	10
11	12	13	14	15	16	17
18	19	20	21	22	23	24
25	26	27	28	29	30	31

1.	2.	3.
4.	5.	6.
7.	8.	9.
10.	11.	12.
13.	14.	15.