


Sample Lesson #2

- Jackie's dad made 36 hotdogs for the class picnic. There were 24 children and 6 adults. If everyone had one hotdog, how many were left over?



- $518 + 261 = ?$

- What time is it?




- Write the symbol that tells you to subtract.

- Which number follows 99?

- Count by tens. 50, 60, _____, _____, 90, _____

- Count the objects in the array. Write an addition sentence to show the sum.

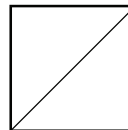
_____ + _____ + _____ + _____ = _____



- If you have ten dimes and ten pennies, do you have more or less than a dollar?

- $750 - 320 = ?$

- This square is divided into two equal shares, called _____.



- Fill in the sign to make this sentence true. $434 \bigcirc 443$

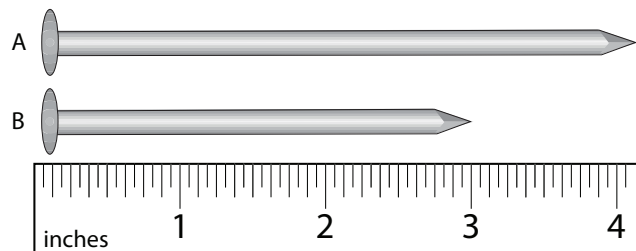
- A stack of three boxes is 54 inches high. One box is 16 inches tall and another is 17 inches tall. How tall is the third box?

- Write the number using base-ten numerals. $1 + 70 + 100$

- Ellen bought a pen for \$2.50 and a tablet for \$1.35. How much money did Ellen spend on these supplies?

- Write your answers in inches.

- How long is nail A?
- How long is nail B?
- How much longer is nail A than nail B?



1. 2.OA.1	2. 2.NBT.7	3. 2.MD.7
4. 1.OA.7	5. 2.NBT.2	6. 2.NBT.2
7. 2.OA.4	8. 2.MD.8	9. 2.NBT.7
10. 2.G.3	11. 2.NBT.4	12. 2.MD.5
13. 2.NBT.3	14. 2.MD.8	15. 2.MD.4