


Sample Lesson #1


1. Circle the shape that comes next in the pattern.



2. How many rabbits in all?



3. Is this shape a triangle?



yes



no

4. Circle the number word for 8.

ten

eight

5. Circle the group that has more.



6. What number comes next?

5, 6, 7, _____

7. Circle the shape that doesn't belong.



8. What month comes right after June?

April

July

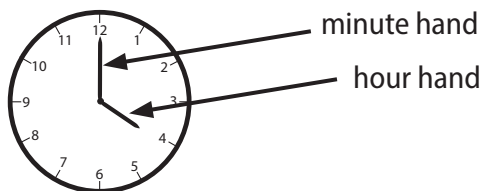


9. How much money is this?



_____ ¢

10. **On a clock, the short hand is the hour hand. The long hand is the minute hand.** What time is it?



_____ o'clock

_____ :00