





Sample Lesson

1. Which shape has perpendicular sides? A)  B)  C)  D) 

2. Write 6,409 using words.

3. Write the sum as a mixed number. $\frac{7}{12} + \frac{6}{12} = \frac{13}{12} \rightarrow \frac{13}{12} = \frac{12}{12} + \frac{\boxed{}}{\boxed{}} = ?$

4. What is the area of a rectangle with a length of 4 m and a width of 3 m?
Label the answer.

5. Tony made a cake. The cake had 1 kg of white cake mix, 195 g of sprinkles, 450 g of whipped topping, and 670 g of mini candies. How many grams of ingredients were used?



6. Round 325,206 to the nearest hundred thousand.

7. $903 - 266 = ?$

8. If Mrs. Parsons gave each of the 6 children in her reading group $\frac{1}{5}$ package of crackers, how many packages of crackers would she need? Between which two whole numbers does your answer lie?

9. $14,244 + 26,376 = ?$

10. Use an equivalent fraction to find the sum of $\frac{2}{10} + \frac{54}{100}$.

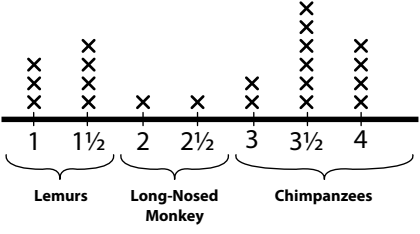
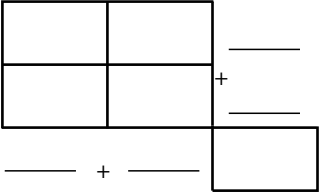
11. $4,625 \div 5 = ?$

12. What is the difference in height between the tallest of primates recorded on the line plot and the shortest primates recorded?

13. Show $\frac{4}{8}$ as the sum of unit fractions. $\underline{\hspace{1cm}} + \underline{\hspace{1cm}} + \underline{\hspace{1cm}} + \underline{\hspace{1cm}} = \underline{\hspace{1cm}}$

14. $52 \times 35 = ?$ Complete the matrix model to find the product.

15. Choose the sign that makes this sentence true.

<p>1. 4.G.2</p>	<p>2. 4.NBT.2</p>	<p>3. 4.NF.3</p>
<p>4. 4.MD.3</p>	<p>5. 4.MD.2</p>	<p>6. 4.NBT.3</p>
<p>7. 4.NBT.4</p>	<p>8. 4.NF.4</p>	<p>9. 4.NBT.4</p>
<p>10. 4.NF.5</p>	<p>11. 4.NBT.6</p>	<p>12. 4.MD.4 Primate Height (in feet)</p> 
<p>13. 4.NF.3</p>	<p>14. 4.NBT.5</p> 	<p>15. 4.NF.2</p> $\frac{12}{12} \bigcirc \frac{11}{12}$