

Sample Quiz

Name _____

Lessons xx–xxx

1.NBT.2

1. I have 3 tens and 7 ones. What number am I? _____

1.OA.5

2. Count by 5s. 25, 30, 35, _____, 45, _____

1.OA.6

3. Add. $6 + 3 + 2 =$ _____

1.OA.6

4. Subtract. $17 - 9 =$ _____

1.MD.2

5. We can use the white bars to measure how long the black bar is. How many white bars equal one black bar?






1.NBT.3

6. Put in a sign to make this true. $88 \bigcirc 98$

1.OA.1

7. There were 12  near the tree. 7  ran away.How many  were left? _____ mice

1.OA.7

8. True or false?  $2 + 2 = 1 + 3$   true false

1.NBT.1

9. What number comes next? 68, _____, _____, 71, 72

1.OA.1

10. Write the sign that tells you to add. _____