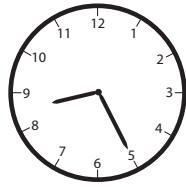


Interleaving Worksheet–Math


1. $14 - 9 = ?$

2. What time is it?



3. $535 + 253 = ?$


4. Is a door 8 inches tall or 8 feet tall?



5. Fill in the sign to make this sentence true. $56 \bigcirc 65$

6. If you have two quarters, three dimes and four pennies, how many cents do you have?

7. Is the number of elephants even or odd? Count by 2s.

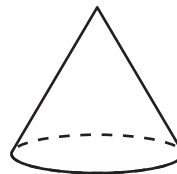


8. $124 + 325 = ?$

9. Mentally add 100 to fill in the blanks. $334, 434, \underline{\hspace{2cm}}, \underline{\hspace{2cm}}, 734$

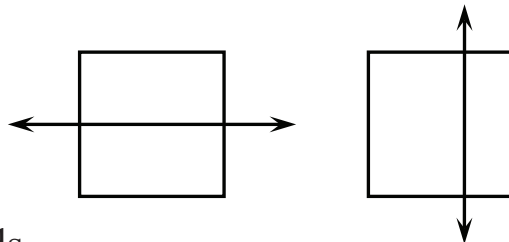
10. $967 - 736 = ?$

11. What is the name of this shape?



12. On Saturday, 324 children and 215 adults visited the zoo. Write the number sentence you would use to find out the total number of people who visited the zoo on Saturday.

13. Which figure is divided exactly in half? Draw it.



14. Write the number 689 using words.

15. Julie had a long strip of licorice that she cut into three pieces. Lance and Lori each got a piece that was 7 inches long, and Julie kept a piece that was 5 inches long. How long was the licorice strip to begin with?

Complete the number sentence. $\underline{\hspace{2cm}} + \underline{\hspace{2cm}} + \underline{\hspace{2cm}} = \underline{\hspace{2cm}}$

1. 2.OA.2	2. 2.MD.7	3. 2.NBT.7
4. 2.MD.3	5. 1.NBT.3	6. 2.MD.8
7. 2.OA.3	8. 2.NBT.7	9. 2.NBT.8
10. 2.NBT.7	11. 1.G.2	12. 2.OA.1
13. 2.G.3	14. 2.NBT.3	15. 2.MD.5