

Sample Quiz

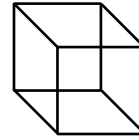
Lessons xxx–xxx

2.MD.5

1. There are two bicycles in Mr. Hanson’s garage. One bike is 24 inches wide. The other bicycle is 30 inches wide. Will the bicycles fit side by side in a space that is 50 inches wide?

2.G.1

2. Write the name of the shape.
How many faces does it have?



2.OA.1

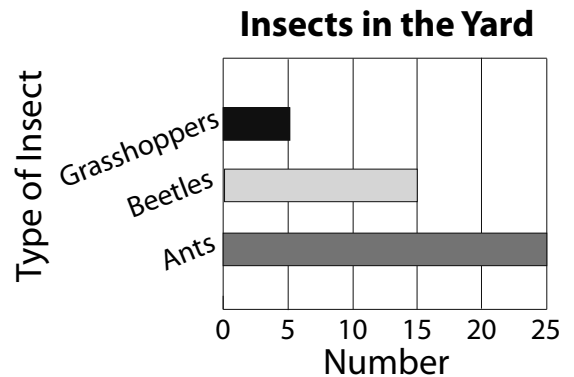
3. Dana and Leo joined a book club. Dana read 22 pages yesterday and 11 pages today. Leo read 14 pages yesterday and 16 pages today. Who read more pages, Dana or Leo?

2.NBT.7

4. $835 - 313 = ?$

2.MD.10

5. How many total insects were in the yard?
How many more ants than grasshoppers were there?

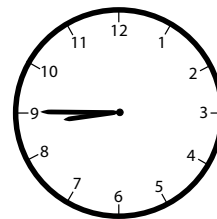


2.OA.1

6. There were 37 birds in a tree. As a cat walked towards the tree, 18 of the birds flew away. How many birds are still in the tree?

2.MD.7

7. What time is shown on the clock?

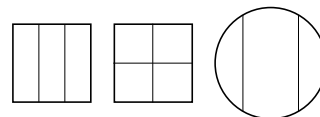


2.NBT.7

8. $518 + 271 = ?$


2.G.3

9. Which shape is divided into three equal thirds? Draw it.



2.OA.4

10. Count the objects in the array. Write an addition sentence to show the sum.



_____ + _____ + _____ + _____ + _____ = _____